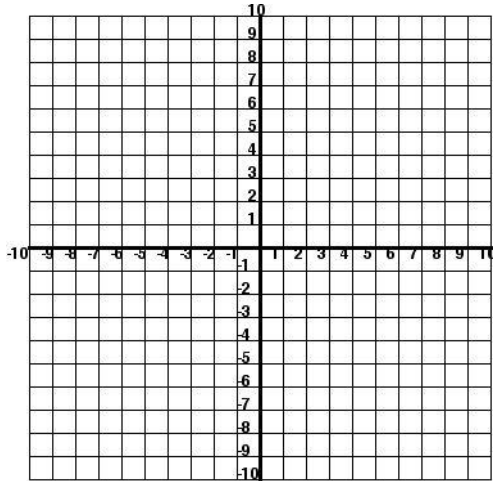


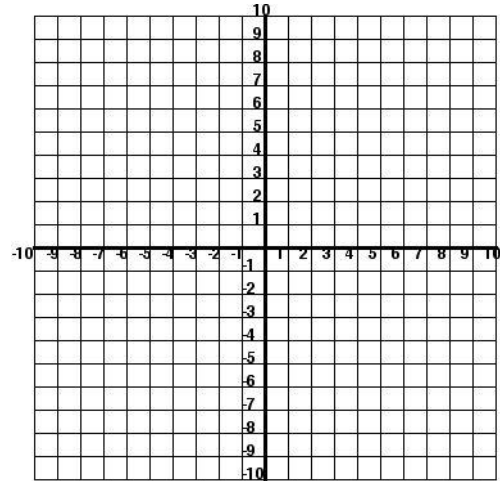
1) $(x - 4)^2 + (y + 1)^2 = 25$

Center: _____ Radius: _____



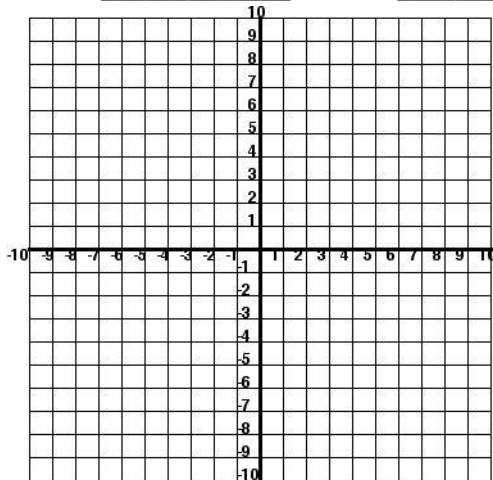
2) $(x + 2)^2 + (y - 3)^2 = 16$

Center: _____ Radius: _____



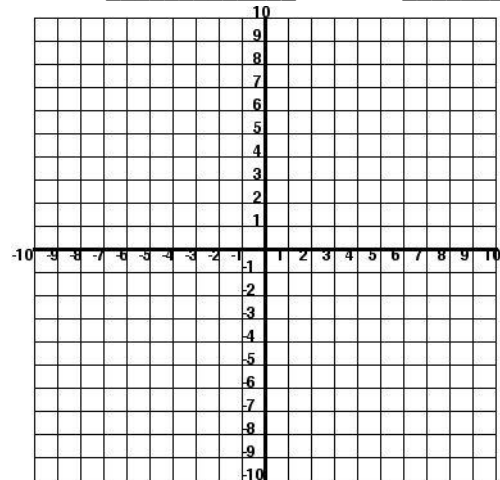
2) $(x - 5)^2 + (y - 6)^2 = 9$

Center: _____ Radius: _____



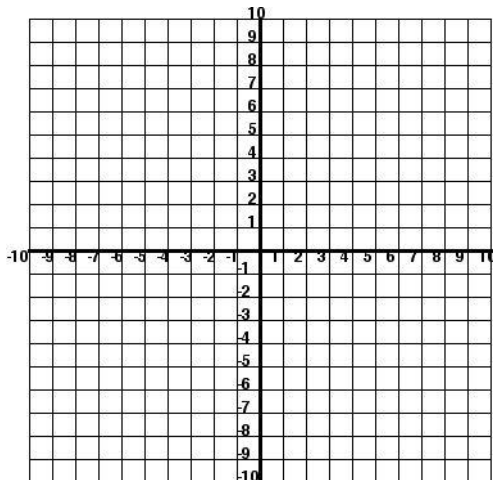
5) $(x - 1)^2 + (y + 2)^2 = 49$

Center: _____ Radius: _____



3) $(x + 3)^2 + y^2 = 36$

Center: _____ Radius: _____



6) $(x + 4)^2 + (y + 3)^2 = 25$

Center: _____ Radius: _____

