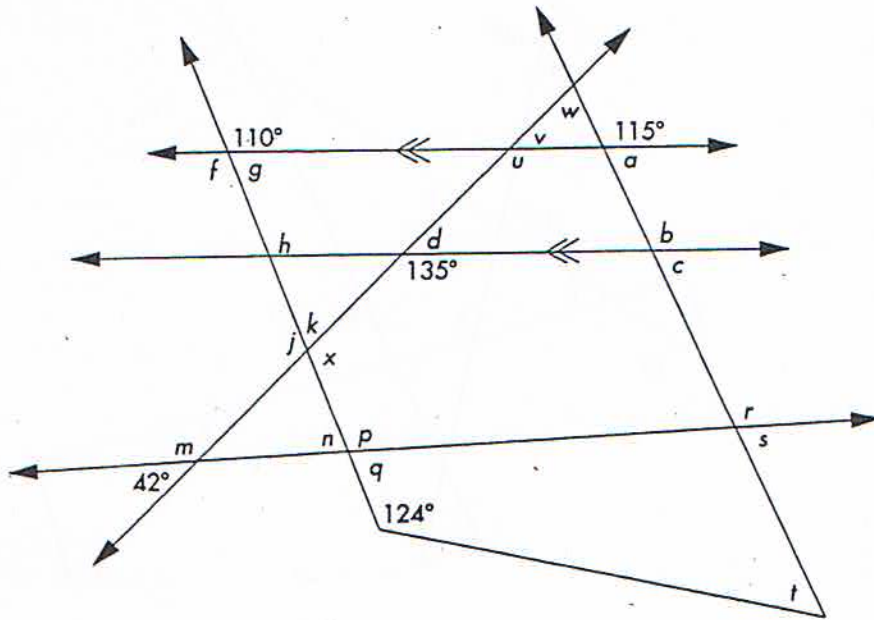


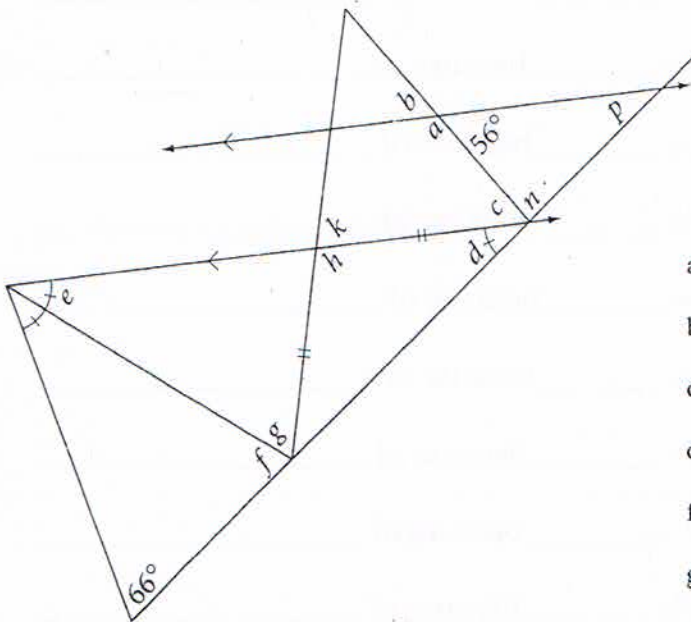
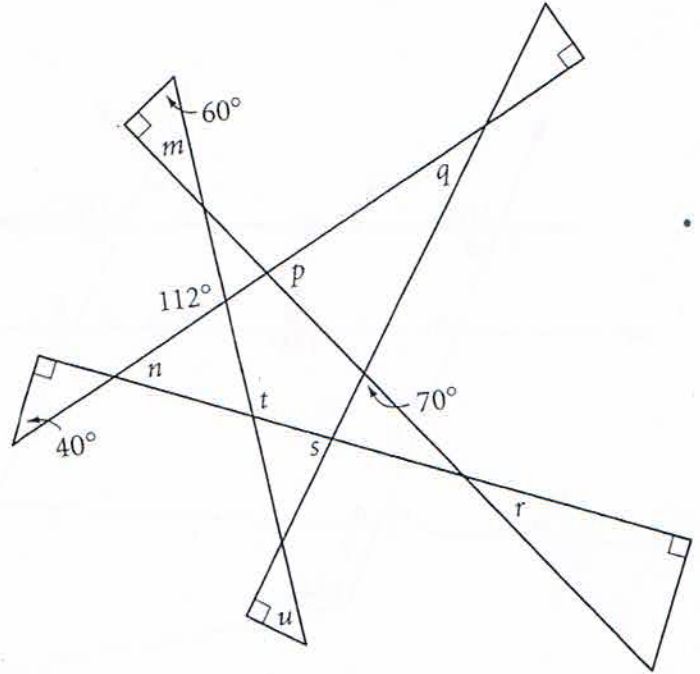
Use your conjectures about angles to find the measure of each angle. Then tell which conjecture(s) you used to find each angle.



- a = 65° because of linear pair conj n = _____ because of _____
- b = _____ because of _____ p = _____ because of _____
- c = _____ because of _____ q = _____ because of _____
- d = _____ because of _____ r = _____ because of _____
- f = _____ because of _____ s = _____ because of _____
- g = _____ because of _____ t = _____ because of _____
- h = _____ because of _____ u = _____ because of _____
- j = _____ because of _____ v = _____ because of _____
- k = _____ because of _____ w = _____ because of _____
- m = _____ because of _____ x = _____ because of _____

Use your conjectures about angles to find the measure of each angle. Then tell which conjecture(s) you used to find each angle.

- m = _____ because _____
- n = _____ because _____
- p = _____ because _____
- q = _____ because _____
- r = _____ because _____
- s = _____ because _____
- t = _____ because _____
- u = _____ because _____



- a = _____ because of _____
- b = _____ because of _____
- c = _____ because of _____
- d = _____ because of _____
- f = _____ because of _____
- g = _____ because of _____
- h = _____ because of _____
- k = _____ because of _____
- n = _____ because of _____
- p = _____ because of _____