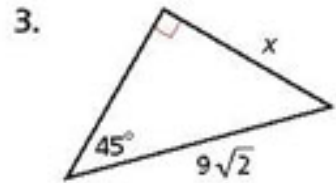
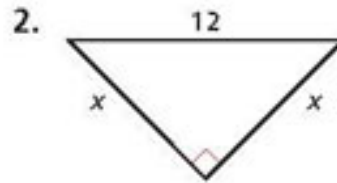
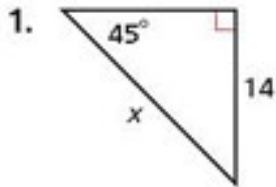
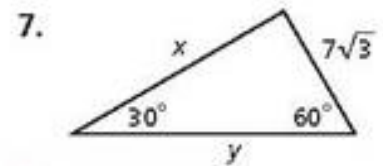
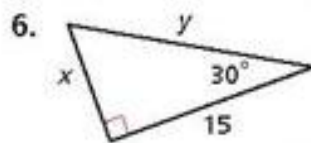
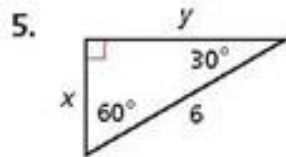


Assignment: Textbook p372 #1-3, 5-7, 9-11, 13-15

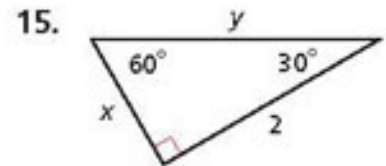
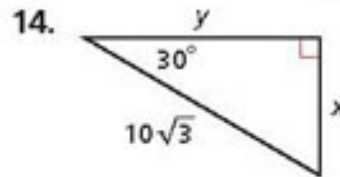
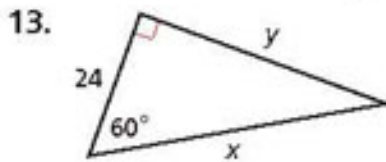
Find the value of x . Give your answer in simplest radical form.



Find the values of x and y . Give your answers in simplest radical form.



Find the value of x and y . Give your answers in simplest radical form.



Find the value of x . Give your answer in simplest radical form.

