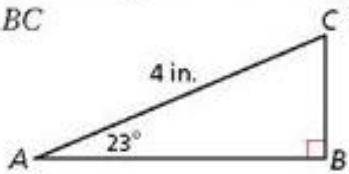


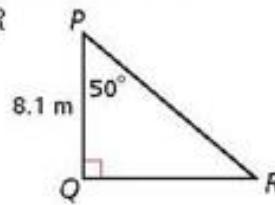
Assignment: Textbook p545 #18-21, 62-65

Find each length. Round to the nearest hundredth.

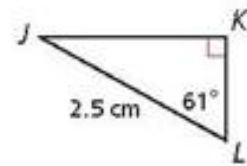
18. BC



19. QR



20. KL

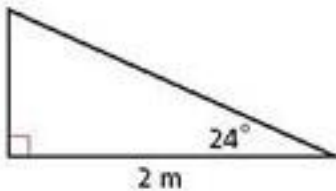


21. **Architecture** A pediment has a pitch of 15° , as shown. If the width of the pediment, WZ , is 56 ft, what is XY to the nearest inch?

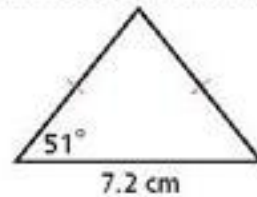


Find the perimeter and area of each triangle. Round to the nearest hundredth.

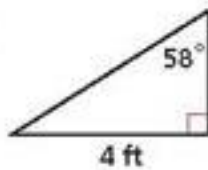
62.



63.



64.



65.

