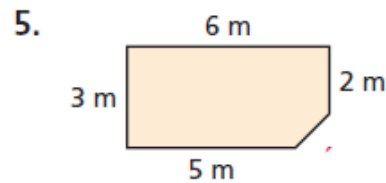
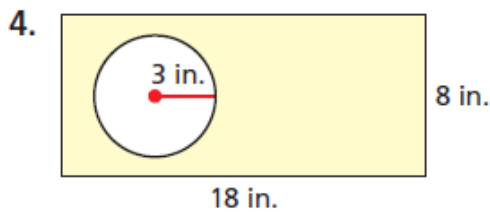
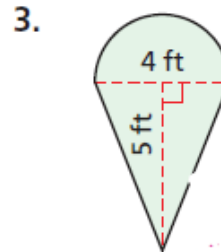
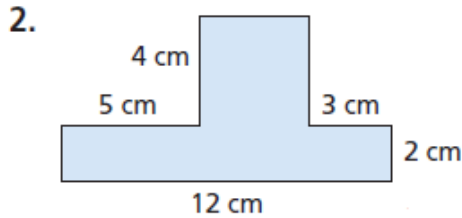


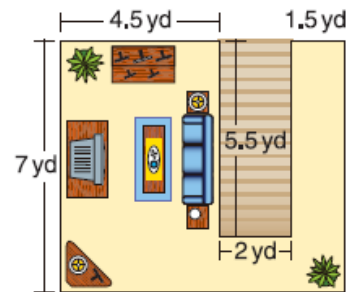
**Textbook p697 #1-6, 9-12**

1. **Vocabulary** Draw a *composite figure* that is made up of two rectangles.

**Multi-Step** Find the shaded area. Round to the nearest tenth, if necessary.



6. **Interior Decorating** Barbara is getting carpet installed in her living room and hallway. The cost of installation is \$6 per square yard. What is the total cost of installing the carpet?



**Multi-Step** Find the shaded area. Round to the nearest tenth, if necessary.

