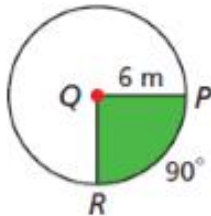


Textbook p813 #2-5, 9-11 in your notes

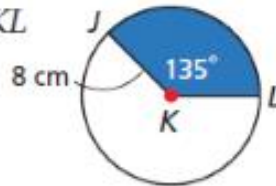
Due Monday 3/23/2020

Find the area of each sector. Give your answer in terms of π and rounded to the nearest hundredth.

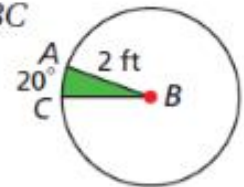
2. sector PQR



3. sector JKL



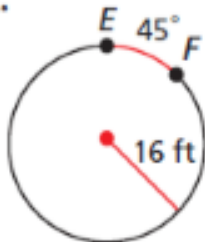
4. sector ABC



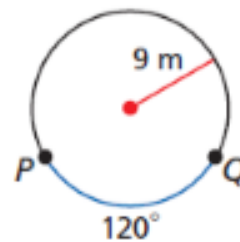
5. **Navigation** The beam from a lighthouse is visible for a distance of 3 mi. To the nearest square mile, what is the area covered by the beam as it sweeps in an arc of 150° ?

Find each arc length. Give your answer in terms of π and rounded to the nearest hundredth.

9. \widehat{EF}



10. \widehat{PQ}



11. an arc with measure 20° in a circle with radius 6 in.