

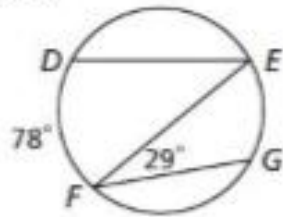
Textbook p824 #2-11 in your notes

Due Monday 3/23/2020

Find each measure.

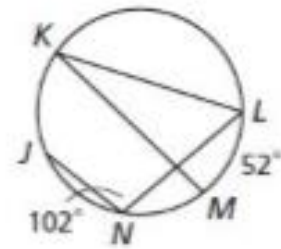
2.  $m\angle DEF$

3.  $m\widehat{EG}$

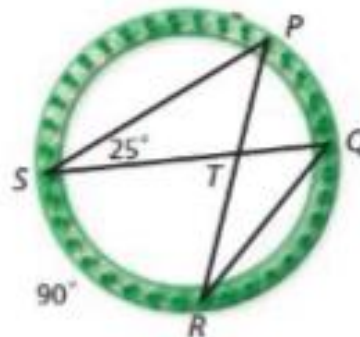


4.  $m\widehat{JKL}$

5.  $m\angle LKM$

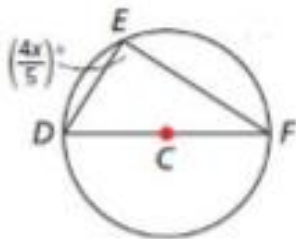


6. **Crafts** A circular loom can be used for knitting. What is the  $m\angle QTR$  in the knitting loom?

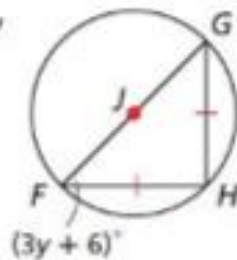


Find each value.

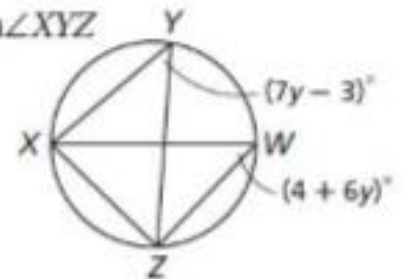
7.  $x$



8.  $y$

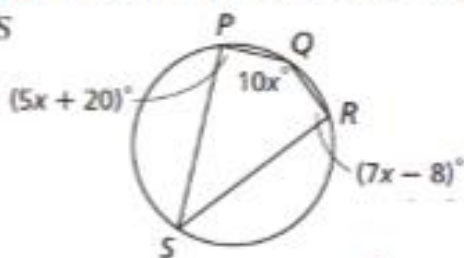


9.  $m\angle XYZ$



**Multi-Step** Find the angle measures of each quadrilateral.

10.  $PQRS$



11.  $ABCD$

